

Based on
NCF 2022 for
Foundational
Stage and NIPUN
BHARAT 2021

PMP Planet[®]
Multimedia Publishers
The Ultimate Resource



Skillment

MATHEMATICS

A Multi-skill Activity Book on Mathematics



1

FS-2
LKG



2



3



WORKSHEET

Chapter-2: Big and Small

Maths (FS-2)
(Worksheet)

A. Circle the small one.

1.



2.



3.

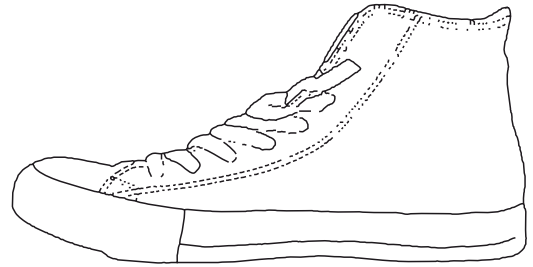
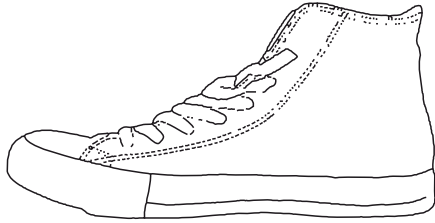


4.

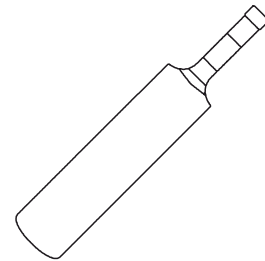



B. Colour the big one.

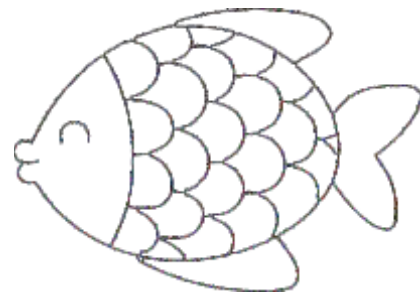
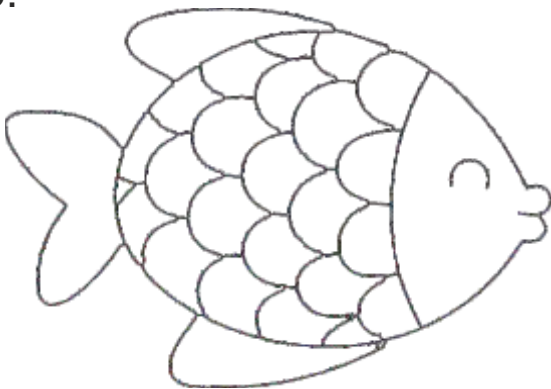
1.



2.



3.




Chapter-3: Tall and Short



Maths (FS-2)
(Worksheet)

A. Colour the tall object with blue and short object with green.

1.






2.



3.




B. Tick (✓) the tall object.



Chapter-4: Long and Short

Maths (FS-2)
(Worksheet)

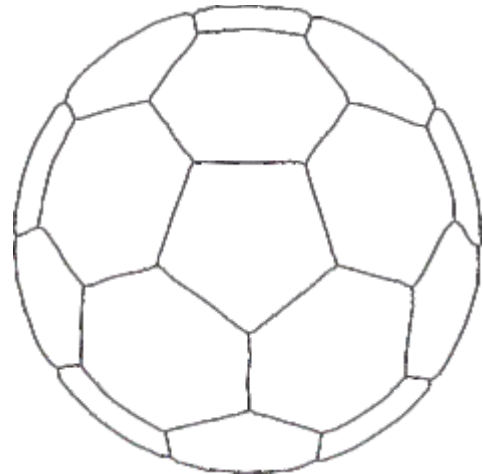




A. Tick (✓) the long one and cross the short one.





Chapter-5: Heavy and Light

Maths (FS-2)
(Worksheet)

A. Colour the heavy object in each set.



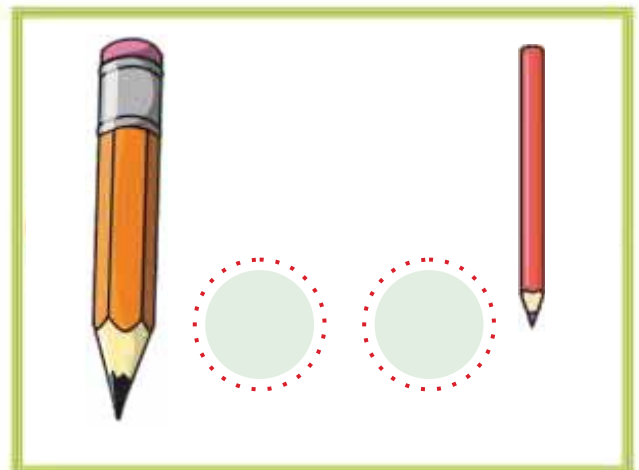
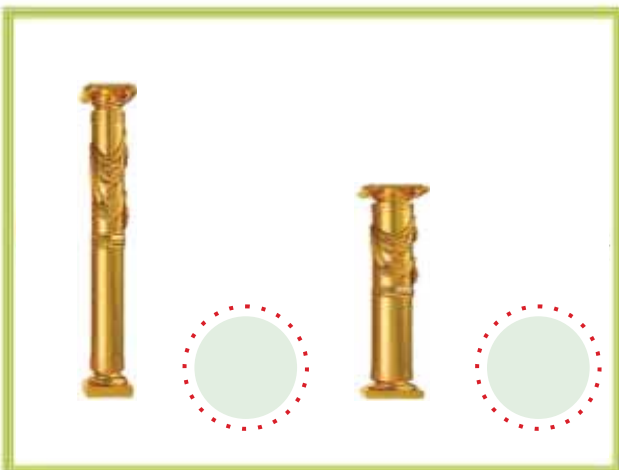

B. Write 'L' for light and 'H' for heavy object in the box.



Chapter-6: Thick and Thin

Maths (FS-2)
(Worksheet)




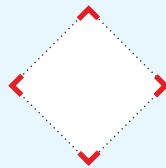




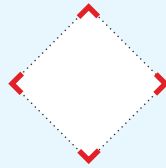
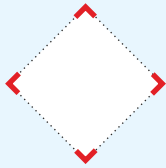
A. Tick (✓) the thick one and cross the thin one in the box.



Chapter-7: More and Less

Maths (FS-2)
(Worksheet)

A. Write 'M' for more and 'L' for less in the box.



Chapter-9: On and Under

Maths (FS-2)
(Worksheet)

A. Tick (✓) the object which are on the table.





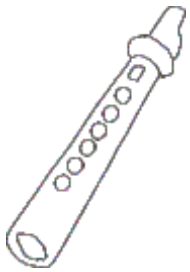
Chapter-10: In and Out

Maths (FS-2)
(Worksheet)

A. Circle the object that are outside the box.



B. Colour the object that are inside the circle.



Chapter-11: Top and Bottom

Maths (FS-2)
(Worksheet)

A. Circle the object that is at the top in each set of pictures..

1.



2.





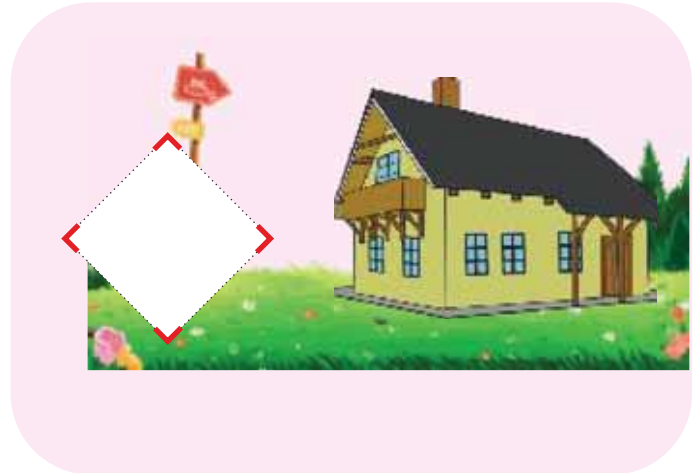
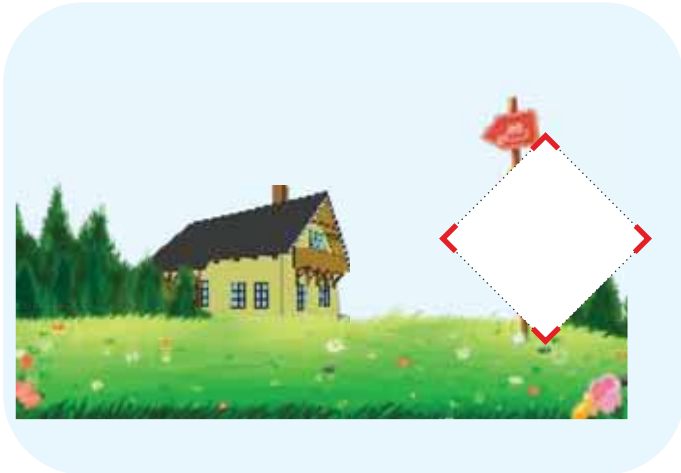


3.



Chapter-12: Near and Far

Maths (FS-2)
(Worksheet)







A. Tick (✓) the image in which the object is far.



Chapter-13: Closed and Open

Maths (FS-2)
(Worksheet)

A. Tick (✓) the object that is open.



Chapter-15 to 19: Number 1 to 5

Maths (FS-2)
(Worksheet)

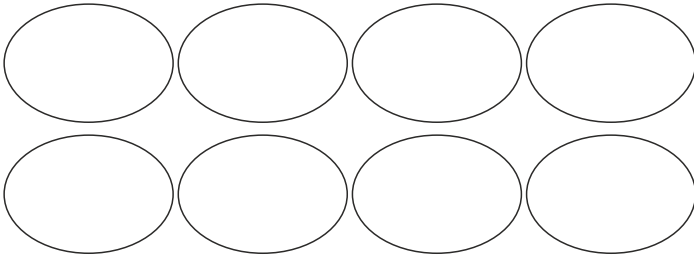
A. Match the objects with the numbers correctly.




Chapter-20 to 25: Number 6 to 10 and 0

Maths (FS-2)
(Worksheet)


A. Colour the object as the number given.




6




8



0



10



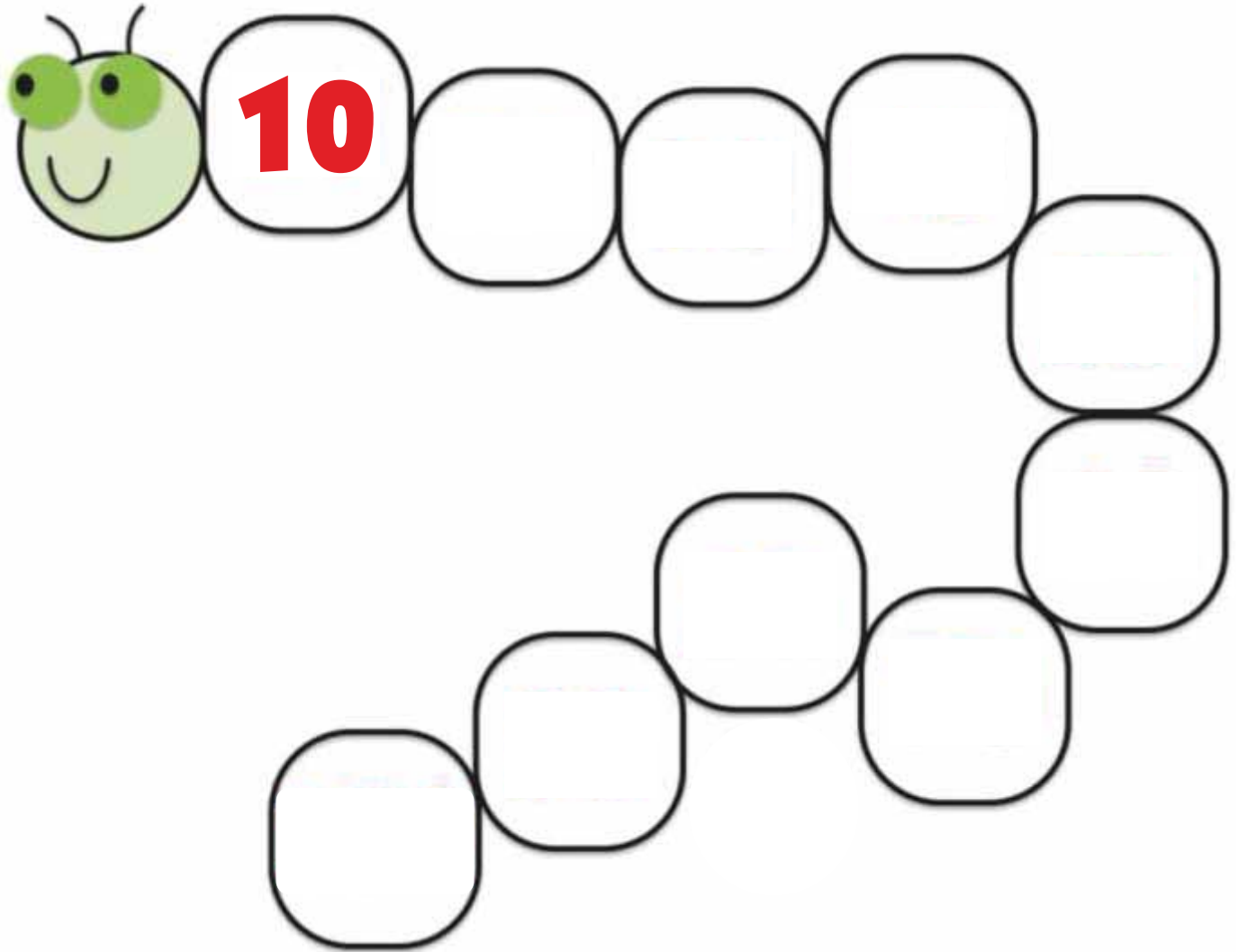
9



Chapter-27: Reverse Counting 10 to 1

Maths (FS-2)
(Worksheet)

A. Write reverse counting from 10 to 1.



Chapter-29: Before, After and Between

Maths (FS-2)
(Worksheet)

A. Write the numbers that come before, after and between.

8,, 10



....., 5

4,

1,, 3

7,, 9

3,

....., 10

....., 6



2,, 4



9,



Chapter-31: Triangle

Maths (FS-2)
(Worksheet)







A. Circle the shapes that are triangle.



Chapter-32: Square

Maths (FS-2)
(Worksheet)





A. Cross the objects that are square.



Chapter-33: Rectangle

Maths (FS-2)
(Worksheet)







A. Write 'R' for the objects that are rectangle in the boxes.



Chapter-34: Circle

Maths (FS-2)
(Worksheet)

A. Tick (✓) the objects that are circle.




Chapter-35: Pattern



Maths (FS-2)
(Worksheet)

A. Draw and colour the next shape.


1.




2.



3.



4.




Chapter-37 to 39: Numbers 11, 12, 13

Maths (FS-2)
(Worksheet)


A. Match the oranges with the numbers.



● 11



● 12



● 11




● 13



● 12



B. Colour the given number of pictures.



11



12



13



Chapter-40 to 42: Numbers 14, 15, 16

Maths (FS-2)
(Worksheet)

A. Match the apples with the numbers.



● 15



● 16



● 14



● 15




● 16



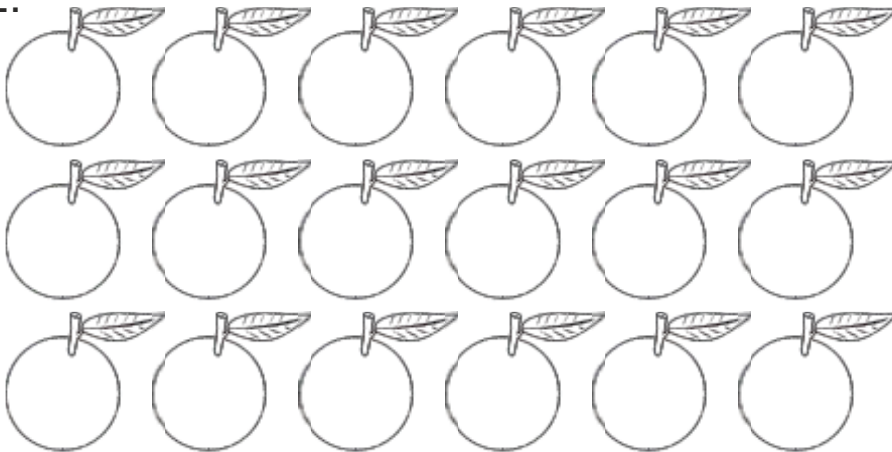
B. Colour the given number of pictures.

1.



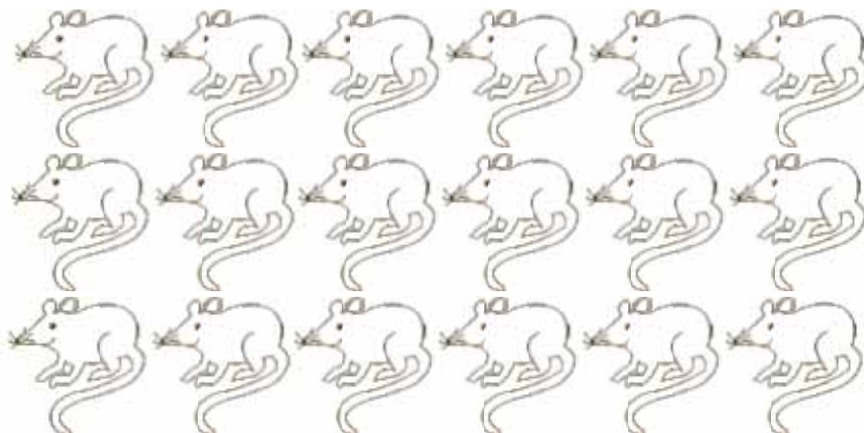
15

2.



16

3.



14



Chapter-43 to 46:
Numbers 17, 18, 19, 20

Maths (FS-2)
(Worksheet)

A. Draw the objects as the numbers given below.

Draw 17 apples



Draw 20 hats



Chapter-48: Reverse Counting 20 to 1

Maths (FS-2)
(Worksheet)

A. Write reverse counting from 20 to 1.

20



Chapter-49 to 51: Numbers 21 to 50

Maths (FS-2)
(Worksheet)

A. Write the number that comes before.

BEFORE	
<input type="text"/>	← 32
<input type="text"/>	← 22
<input type="text"/>	← 26
<input type="text"/>	← 34
<input type="text"/>	← 56
<input type="text"/>	← 40
<input type="text"/>	← 45
<input type="text"/>	← 55
<input type="text"/>	← 30
<input type="text"/>	← 39

B. Write the number that comes after.

AFTER	
32	→ <input type="text"/>
24	→ <input type="text"/>
44	→ <input type="text"/>
36	→ <input type="text"/>
57	→ <input type="text"/>
39	→ <input type="text"/>
24	→ <input type="text"/>
48	→ <input type="text"/>
27	→ <input type="text"/>
22	→ <input type="text"/>



C. Write the missing numbers.

	22		24	25	
27		29		31	
33		35	36		
39			42		
45	46		48		



Chapter-53 to 57: Numbers 51 to 100

Maths (FS-2)
(Worksheet)

A. Write the number that comes before.

BEFORE	
<input type="text"/>	← 54
<input type="text"/>	← 56
<input type="text"/>	← 66
<input type="text"/>	← 68
<input type="text"/>	← 74
<input type="text"/>	← 71
<input type="text"/>	← 83
<input type="text"/>	← 89
<input type="text"/>	← 95
<input type="text"/>	← 97

B. Write the number that comes after.

AFTER	
50	→ <input type="text"/>
55	→ <input type="text"/>
63	→ <input type="text"/>
68	→ <input type="text"/>
73	→ <input type="text"/>
74	→ <input type="text"/>
82	→ <input type="text"/>
86	→ <input type="text"/>
99	→ <input type="text"/>
97	→ <input type="text"/>

